

Level A

QUICK • PIK'S



Educational
Development
Associates, Inc.

Makes the
Difference:
Grades and
Test Scores
Soar With
ACALETICS®!

*Two Decades
of Excellence*

Book 1

Student's Name: _____ Date: _____

Teacher's Name: _____ School Name: _____



LEVEL A: QUIK-PIK #17

NAME _____

DATE _____

1. $8 + 2 =$

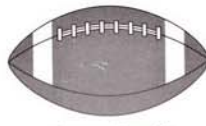
2. Mary's family will be moving to Washington D.C. from Tampa, Florida. What unit of measure would be best to use to find out the distance between the 2 cities?

- (A) meter (B) kilometer (C) centimeter (D) ton (E) liter

3. Circle all the objects below that are shaped like a sphere.



baseball



football



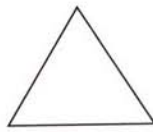
basketball



soda can



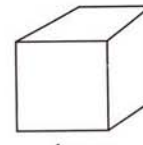
globe



triangle



bowling ball



box

4. What comes next in this pattern?

10, 15, 20, 25, 30, 35,

- (A) 3 (B) 5 (C) 36 (D) 40 (E) 50

5. The contents of a bag of marbles are listed in this table.

Color	Amount
Red	6
Blue	4
Green	3
Yellow	2
White	3

Which color marble appears the least?

- (A) red (B) blue (C) white (D) yellow (E) green

