



COMPREHENSIVE MIDTERM ASSESSMENT

LEVEL
B

GENERATION
Grades and test scores will soar with ACALETICS®!

\times $\%$ $=$ $+$
 $-$ $>$ \triangle \circ



Math, Reading, SES, Results.


Student's Name: _____ Date: _____

Teacher's Name: _____ School Name: _____



**LEVEL B: NGS³ COMPREHENSIVE
MIDTERM ASSESSMENT**

- 21 Which unit is best to measure the amount of water in a swimming pool?










- (A) centimeter
- (B) Celsius
- (C) liter
- (D) meter
- (E) gram

- 22 The graph below shows the number of apples John ate each day during the past week.

On which day did John eat the most apples?

Number Of Apples Eaten

Day	Number of Apples
Sunday	
Monday	
Tuesday	
Wednesday	
Thursday	
Friday	
Saturday	

Each  = 2 apples

- (A) Monday
- (B) Tuesday
- (C) Wednesday
- (D) Thursday
- (E) Friday