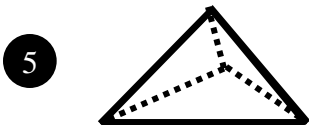
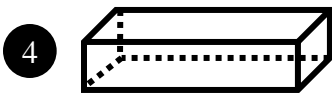
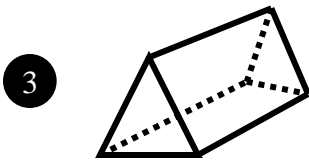
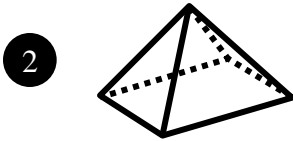
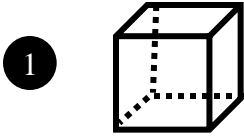


NAME _____

Draw a net of each of the following figures.



6 Circle the net(s) that will form cubes.

