



NAME _____

DATE _____

1. Cindy made 4 telephone calls that lasted 6 minutes each. She made 1 phone call that lasted 7 minutes. The expression below shows the total time of the calls.

$$(4 \times 6) + 7$$

Which expression below is equivalent to $(4 \times 6) + 7$?

- (A) $4 \times (6 + 7)$ (C) $7 + (4 \times 6)$ (E) NH
(B) $(4 + 7) \times 6$ (D) $(4 + 6) + 7$

2. During our first basketball game, 4 players scored 5 points each. During our second game, 3 players scored 5 points each. The expression below shows the total points scored by these players.

$$5 \times (4 + 3)$$

Which expression below is equivalent to $5 \times (4 + 3)$?

- (A) $4 \times (5 + 3)$ (C) $3 + (4 \times 5)$ (E) NH
(B) $(4 + 3) \times 5$ (D) $(4 + 3) + 5$

3. The square has a perimeter of 40 meters. What is the length of each side?

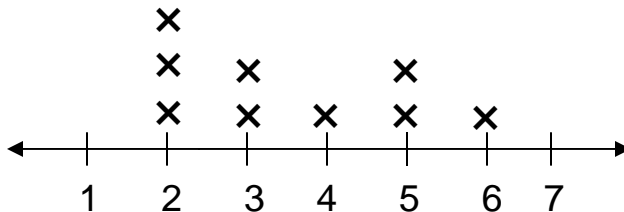


- (A) 5 m (B) 10 m (C) 20 m (D) 40 m (E) 400 m

4. Which of the figures below has no right angles?



5. Which data set is displayed in the line plot below?



- (A) 2, 3, 4, 5, 6 (C) 2, 2, 3, 4, 5, 6, 6, 5 (E) NH
(B) 2, 2, 3, 3, 4, 5, 5, 6, 7 (D) 2, 3, 4, 6, 2, 5, 3, 5, 2









NAME _____

DATE _____

1. The chart below shows the stamp shapes the art teacher has to choose from.

How many different combinations of 1 shape from each column are there?

#1	#2	#3
		
		

Answer: _____

2. Tyson is thinking of 2 numbers. The sum of the numbers is 21. One number is twice as big as the other. What are the two numbers?

(A) 10, 11


(C) 7, 14

(E) 12, 9


(B) 9, 12

(D) 6, 18

3. Eva made a phone call at:



She finished her call at:



How long was Eva on the phone?

Answer: _____

4. Draw a line symmetry in each of the figures below.

H

E

C

5. Given the following data, construct a bar graph.

Cars in Parking Lot

Color of Cars	Number of Cars
Silver	20
Black	12
White	20
Red	16