

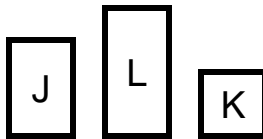
1 Write in the missing number for the related facts.

Facts	Related Facts
$4 + 6 = 10$	$10 - 6 = \underline{4}$
$5 + 7 = 12$	$12 - 7 = \underline{\quad}$
$4 + 8 = 12$	$12 - 8 = \underline{\quad}$
$5 + 9 = 14$	$14 - 9 = \underline{\quad}$
$5 + 0 = 5$	$5 - 0 = \underline{\quad}$

2 Write in the missing number for the problems in the table.

Facts	Related Facts
$5 + 1 = 6$	$1 + 5 = \underline{6}$
$7 + 3 = 10$	$3 + 7 = \underline{\quad}$
$9 + 5 = 14$	$5 + 9 = \underline{\quad}$
$2 + 9 = 11$	$2 + 9 = \underline{\quad}$
$4 + 5 = 9$	$5 + 4 = \underline{\quad}$

3 Which answer choice shows the blocks ordered from largest to smallest?



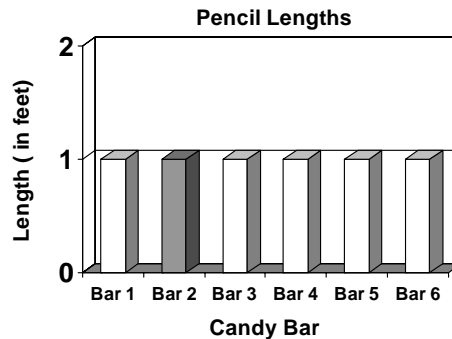
- (A) L, J, K (B) J, K, L (C) K, J, L
 (D) L, K, J (E) J, L, K

4 Which shape can be made out of the two shapes below?



- (A) (B) (C)
 (D) (E)

5 There are 6 bars in the graph below. How many completely shaded bars are there?



- (A) 1 (B) 2 (C) 3 (D) 4 (E) 5



1 Complete the table below.

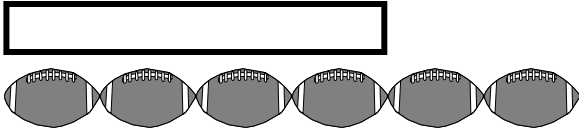
$1 + 9 = 10$	$1 + 9 + 1 = 11$
$2 + 8 = 10$	$2 + 8 + 3 =$
$3 + 7 = 10$	$3 + 7 + 5 =$
$4 + 6 = 10$	$4 + 6 + 2 =$
$5 + 5 = 10$	$5 + 5 + 4 =$
$6 + 4 = 10$	$6 + 4 + 6 =$

2 What is the sum of the number **A** in the pattern below and 6?

2	4	6	8	10		A
---	---	---	---	----	--	----------

- (A) 12 (B) 20 (C) 14
(D) 15 (E) 13

3 How many football lengths is the rectangle below?



- (A) 1 (B) 2 (C) 3
(D) 4 (E) 5

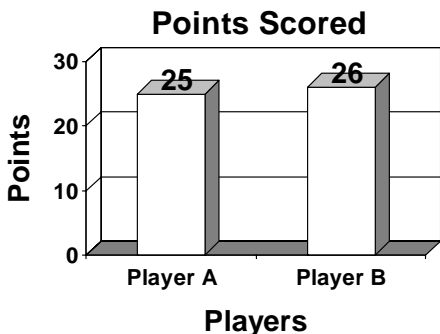
4 How many sides does a rectangle have?



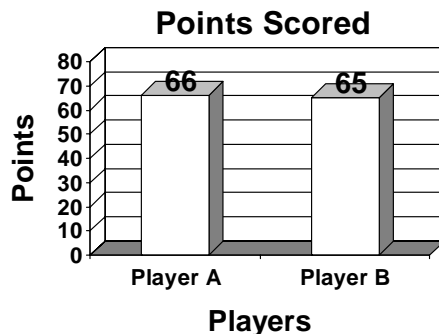
- (A) 1 (B) 2 (C) 3
(D) 4 (E) 5

5 The numbers below are paired. Circle the largest number for each pair.

Pair A: 25 26



Pair B: 66 65



Pair C: 95 94

