




SAMPLE – Comprehensive Pre/Post Assessment

LEVEL B: NGS³ COMPREHENSIVE PRE/POST ASSESSMENT

- 21 The 2 cylinders below balance with six cubes weighing 1 pound each.

How many pounds does each cylinder weigh?


- (A) 1
- (B) 2
- (C) 3
- (D) 4
- (E) 6



- 22 Alan's 3 toy boats balance with a teddy bear weighing 12 pounds.

How many pounds does each toy boat weigh?


- (A) 1
- (B) 2
- (C) 3
- (D) 4
- (E) 8



Continue 


- 49 Bob has 4 boxes of lollipops. There are 5 lollipops in each box.

How many lollipops are there altogether? Show your work.



- (A) $4 + 5$
 (B) $5 - 4$
 (C) 9
 (D) $4 + 4 + 4 + 4$
 (E) $5 + 5 + 5 + 5$
- 50 Six red containers are on the kitchen table. Three apples are in each of the containers.

Which expression can be used to find the total number of apples in the containers?
Show your work.



- (A) $6 + 3$
 (B) $3 + 6$
 (C) $3 + 3 + 3 + 6$
 (D) $3 + 3 + 3 + 3 + 3 + 3$
 (E) $6 \div 3$

Stop.